

First Steps in Math

HOW MANY DO YOU SEE?

REM 5010B

AUTHOR: Barbara Johnson
ILLUSTRATOR: Diana Fisher
COVER DESIGNER: Meg Turecek

A TEACHING RESOURCE FROM



©2011, 2005

**Copyright by Remedia Publications, Inc.
All Rights Reserved. Printed in the U.S.A.**

The purchase of this product entitles the individual teacher to reproduce copies for classroom use.
The reproduction of any part for an entire school or school system is strictly prohibited.

To find Remedia products in a store near you, visit:
www.rempub.com/stores

REMEDIA PUBLICATIONS, INC.
15887 N. 76TH STREET • SUITE 120 • SCOTTSDALE, AZ • 85260



This product utilizes innovative strategies and proven methods to improve student learning. The product is based upon reliable research and effective practices that have been replicated in classrooms across the United States. Information regarding the research basis is provided on our website at www.rempub.com/research

INTRODUCTION

These delightfully illustrated activities are the perfect solution for students who still need to make the connection between concrete and symbolic number representation. Students examine the fun illustrations and count the number of different objects and then use them to solve simple addition and subtraction problems.

The essential practice these lessons offer will help build a foundation for success in math. The post-test on page 21 can be used as an assessment tool.

To reinforce a sense of accomplishment when all of the activities have been completed, we have included a certificate of achievement at the end of the book. The certificate can be filled out and signed by the parent or teacher and colored in by the student.

Name _____

1. How many




are there? _____

2. How many



are there? _____

3. How many



are there? _____

4. How many




are there? _____

5. How many



are there? _____



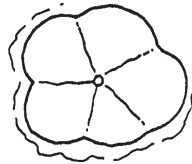
Name _____

1. How many



are there? _____

2. How many



are there? _____

3. How many



are there? _____

4. How many



are there? _____

5. How many



are there? _____



Name _____

1. How many




are there? _____

2. How many



are there? _____

3. How many




are there? _____

4. How many



are there? _____

5. How many



are there? _____

