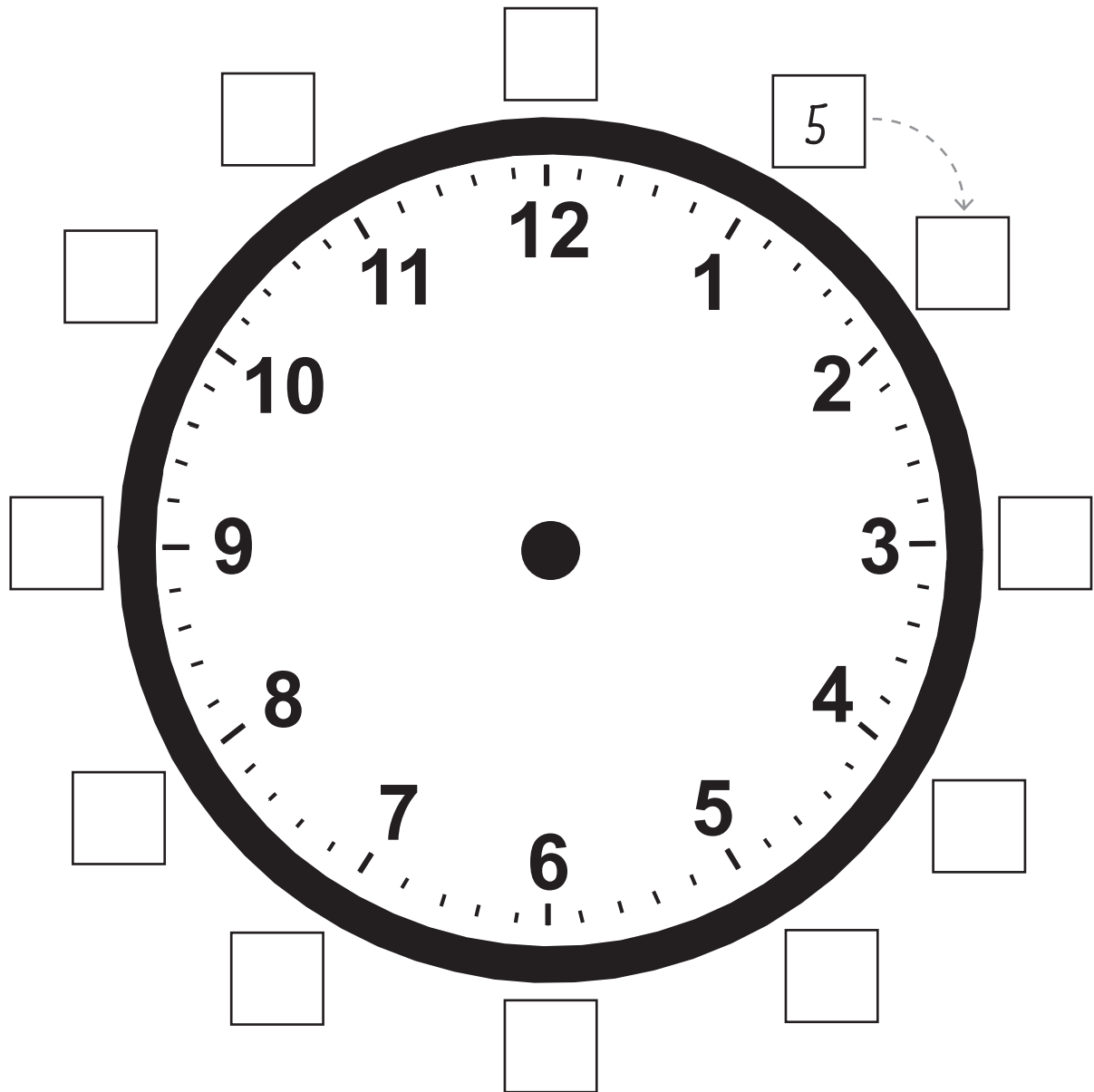


Name _____

Count by Fives

Count the numbers on the clock face by fives. Write the numbers in each box. The first one is done for you. Then answer the questions.



1. Where should the minute hand point to show 10 minutes?

2. Where should the minute hand point to show 25 minutes?

3. Where should the minute hand point to show 40 minutes?

4. Where should the minute hand point to show 55 minutes?

Name _____

Telling Time by Fives

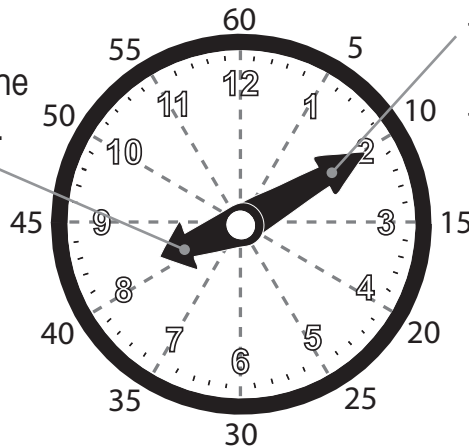
When the minute hand points to a number, the time is represented by five-minute increments.

The *minute hand* tells how many minutes past the hour it is.

The hour hand is pointing towards the 8. This is the hour.

The minute hand is pointing to the 2. This is 10 minutes.

8 : **10**
hour hand minute hand



The time above is eight ten.


Write the time for each clock two different ways.

1.




_____ : _____

4.



_____ : _____

2.




_____ : _____

5.




_____ : _____

3.



_____ : _____

6.




_____ : _____

Where's the Hand Pointing?

Use each clock to answer the questions.

1.




How many minutes is the minute hand pointing to? _____

Draw the hour hand to show the hour is 7. _____

What time is it? _____

2.



How many minutes is the minute hand pointing to? _____

Draw the hour hand to show the hour is 2. _____

What time is it? _____

3.




How many minutes is the minute hand pointing to? _____

Draw the hour hand to show the hour is 10. _____

What time is it? _____

4.




How many minutes is the minute hand pointing to? _____

Draw the hour hand to show the hour is 12. _____

What time is it? _____

5.



How many minutes is the minute hand pointing to? _____

Draw the hour hand to show the hour is 6. _____

What time is it? _____

Name _____

A.M. & P.M.


a.m. The time from midnight until just before noon. Some words that describe a.m. are:

morning, sunrise, before noon, midnight

p.m. The time from noon until just before midnight. Some words that describe p.m. are:

evening, night, afternoon, noon, sunset

Noon is another way to say 12:00 p.m.



Answer the following questions.

1. What are three things that you do in the a.m.? _____

2. What are three things that you do in the p.m.? _____

3. Look at a clock. What time is it? Is it a.m. or p.m.? _____

Is it *a.m.* or *p.m.*? Write your answer next to each word.

- | | | | |
|--------------|-------|-------------------|-------|
| 4. breakfast | _____ | 9. dinner | _____ |
| 5. bedtime | _____ | 10. school starts | _____ |
| 6. dawn | _____ | 11. daylight | _____ |
| 7. midnight | _____ | 12. noon | _____ |
| 8. evening | _____ | 13. dusk | _____ |

Name _____

Elapsed Time Review

Use the word bank to complete each statement.

week minute
hour day

There are 168 hours
in one week. How
much of that time
are you asleep?



1. There are 60 seconds in one _____.
2. There are 60 minutes in one _____.
3. There are 24 hours in one _____.
4. There are 7 days in one _____.

Shade in the correct answer.



5. About how long
would it take to
make a copy?
(A) 1 week
(B) 1 hour
(C) 1 minute
(D) 1 day

6. About how long
would it take to play
a baseball game?
(A) 2 hours
(B) 2 minutes
(C) 2 seconds
(D) 2 weeks



7. About how long
would it take to get
your hair cut?
(A) 3 hours
(B) 30 minutes
(C) 3 months
(D) 3 weeks